


TRAIL MIX MATH

Name: _____ Date: _____

1. What is the total number of ingredients you used to create trail mix? _____
2. Write fractions for each of the ingredients. (HINT: This is the Fractional Unit of the whole recipe).



Chex Cereal



Chocolate Cheerios



Craisins



Twisted Pretzels




Yogurt Chips



M&M Candies



Popcorn



Reese's Pieces



Stick Pretzels



Marshmallows





Almonds



Peanuts

 +  =

 +  =

 +  =

 +  =